

<u>SL. NO.</u>	<u>SUBJECT</u>	<u>HOMEWORK</u>
1.	ENGLISH	<p>A. PROJECT WORK:</p> <p>Prepare a webchart on Power of Words.</p> <p>B. Answer the following questions briefly: (2×5=10)</p> <ol style="list-style-type: none">Write the abstract noun forms of : a. Sincere b. Wise c. Loyal d. CruelWrite the significance of the title “Monday Morning Blues”.Describe the process of the extraction of Tom Sawyer’s tooth by Aunt Polly in your own words.What confusion led to the pandemonium in the classroom in the story “ The Tale of a Tail”.Write a brief character sketch of Tamil Pundit.
2.	HINDI	<ol style="list-style-type: none">अध्याय ‘लौहपुरुष’ में सरदार वल्लभ भाई पटेल और उनके पिताजी के बीच हुई बातचीत को संवाद शैली के रूप में लिखिए। (3)‘मुँह’ से संबंधित कोई चार मुहावरे एवं उनके अर्थ लिखिए। इन मुहावरों से वाक्य बनाइए। (2)होजा की तरह किसी एक बुद्धिमान व्यक्ति का नाम लिखिए। आप उन्हें क्यों पसंद करते हैं? अपने शब्दों में लिखिए। (3)अध्याय ‘दिमागी लड़ाई’ में आए कोई चार संयुक्ताक्षर वाले शब्द लिखिए। इन शब्दों से वाक्य बनाइए। (2)परियोजना कार्य- ‘सादा जीवन, उच्च विचार’ रखने वाले कोई एक स्वतंत्रता सेनानी के जीवन के बारे में जानकारी इकट्ठा करके (40 से 50 शब्दों में) लिखिए और उनका चित्र भी चिपकाइए। (A4 SIZE PAPER)
3.	BENGALI	<p>১) প্রশ্নগুলির সঠিক উত্তর দাও । 1x5=5</p> <p>ক) বঙ্কিমচন্দ্র চট্টোপাধ্যায়কে কী নামে অভিহিত করা হয়?</p> <p>খ) কারা জ্যোতিষ জানত বলে দাবি করেছিল?</p> <p>গ) রাজা ভবচন্দ্র বিপদে পড়েছিলেন কেন?</p> <p>ঘ) ‘শিশু’ কবিতাটি কোন মূল কাব্যগ্রন্থ থেকে নেওয়া হয়েছে?</p> <p>ঙ) কে বুদ্ধদেবকে এড়িয়ে চলতেন?</p>

২) জগৎ-পারাবার তীরে ছেলেরা কীভাবে খেলা করছে তা লেখো। 2

৩) তোমার চারপাশে দেখা কয়েকটি কুসংস্কারের একটি তালিকা প্রস্তুত কর। 3

Project Work 5

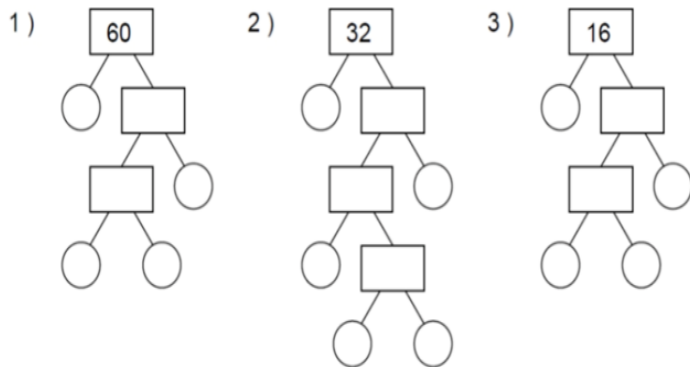
একটি A4 পেপারে তোমার প্রিয় মহাপুরুষের চিত্রের একটি কোলাজ প্রস্তুত করে তাঁর জীবনের গুরুত্বপূর্ণ ঘটনাগুলি সাল অনুযায়ী লিপিবদ্ধ কর।

4.

MATHS

A. Answer the following questions:




- How many match sticks are needed to make the roman numerals equivalent to 15
(a) 6 (b) 7 (c) 4 (d) 10
- What is the difference between the place value and face value of 5 in 91,25,678?
(a) 4995 (b) 0 (c) 4095 (d) 5000
- What number comes next?
40,46,300 ; 41,47,300 ; 42,48,300 ; ?
(a) 43,47,300 (b) 42,47,300 (c) 43,49,300 (d) 42,46,400
- Read the given statements carefully and state T for True and F for False
(i) While writing a number in the Indian system of numeration, commas are inserted after each digit.
(ii) There is no roman numeral to represent 0.
(iii) Greatest 6-digit odd number that can be formed using the digits 8,3,0,2,4 and 5 (using each digit only once) is 854023
- P is the Lowest Common Multiple of 45 and 50. What is the value of $10P + 100$?
- Find the prime factors of the following numbers:



B. Activity:

Write all prime numbers between 1 to 50 by the Sieve Eratosthenes method.

NOTE: All the holiday homework to be done in your mathematics notebook.

<p>5.</p>	<p>SCIENCE</p>	<ol style="list-style-type: none"> From which part of plant can sugarcane be grown? A) Roots B) Stems C) Leaves D) Underground root The seed is covered by an outer layer called the_____ A) Seed coat B) Cotyledon C) Micropyle D) Baby plant Look at the given pictures and name the vegetative part of the plant is used to reproduce a new plant. <div style="display: flex; justify-content: space-around; align-items: center;"> <div style="text-align: center;"> <div style="border: 1px solid black; padding: 2px; display: inline-block;">Bryophyllum</div>  </div> <div style="text-align: center;"> <div style="border: 1px solid black; padding: 2px; display: inline-block;">Rose</div>  </div> </div> <ol style="list-style-type: none"> Look at the pictures given below and guess how the seeds travel and reach different places. <div style="text-align: center;">  </div> <ol style="list-style-type: none"> Think what would happen, if seeds did not spread and remained at one place only? <p>Activity- Seed Germination Experiment: Set up an experiment to observe and document the germination process of different types of seeds. You can vary factors such as light, temperature, and soil moisture to see how they affect germination rates.</p>
<p>6.</p>	<p>SOCIAL SCIENCE</p>	<p><u>PROJECT</u></p> <p>On an A4 size paper paste /draw two different types of houses and write two characteristic features of each.</p> <p>Answer the following questions:-</p> <ol style="list-style-type: none"> Draw a Mind Map on different types of hardship faced by migrants during forced migration. (3) Enumerate any three ways in which you share Responsibilities in your family. (3) Rani one of your childhood friend is living in Himachal Pradesh. Identify the most suitable house where she could live. Mention any one reason to support your answer. (2) Specify any two issues that make you worried before moving to an unknown place. (2) <p>NOTE: All the holiday homework to be done in your Social Science notebook.</p>

6.

SANSKRIT

गतिविधि: -

चित्रं निर्माणं कृत्वा वस्तूनां नामानि संस्कृत-भाषायाम् लिखन्तु।


1. चित्राणि दृष्ट्वा रिक्तस्थानानि पूरयन्तु-

1x5=5

(क) एषः _____ अस्ति।




(ख) एतत् _____ अस्ति।



(ग) एषा _____ अस्ति।



(घ) एषः _____ अस्ति।



(ङ) एषा _____ अस्ति।



(मञ्जूषा - अध्यापिका, महिला, सैनिकः, फलम्, चिकित्सकः)

2. हिन्दीभाषायाम् शब्दार्थाः लिखन्तु -

1x5=5

(क) भ्रमन्ति _____

(ख) सर्वकार्येषु _____

(ग) ज्येष्ठः _____

(घ) अवगच्छामि _____
